

O-Level Geography

Paper 2

Unsolved Topical

Past Papers with Marking Schemes

All Variants

2015-2021

Title	O-LEVEL TOPICAL GEOGRAPHY PAPER 2
Published by	MS Books (042-35774780)
Legal Advisor	Ashir Najeeb Khan (Advocate) AKBAR LAW CHAMBERS 39-40, 1 st Floor, Sadiq Plaza, The Mall, Lahore. 0307-4299886, 042-36314839
For Complaints/Order	MS Books 83-B, Ghalib Market, Gulberg III Lahore (042-35774780),(03334504507),(03334548651)
Price	Rs.

TABLE OF CONTENTS

Sr #	Chapters	Pg #
1.	Natural Topography	7
2.	Climate	29
3.	Water Resources	66
4.	Forests	82
5.	Fishing	104
6.	Mineral Resources	118
7.	Power Resources	139
8.	Agriculture	183
9.	Secondary & tertiary industries	260
10.	Trade	333
11.	Transport & communication	363
12.	Population	411

Natural Topography

Q1/(a)(i)/P2/M/J/16

1 (a) Study Fig. 1 which is a map of northern Pakistan.

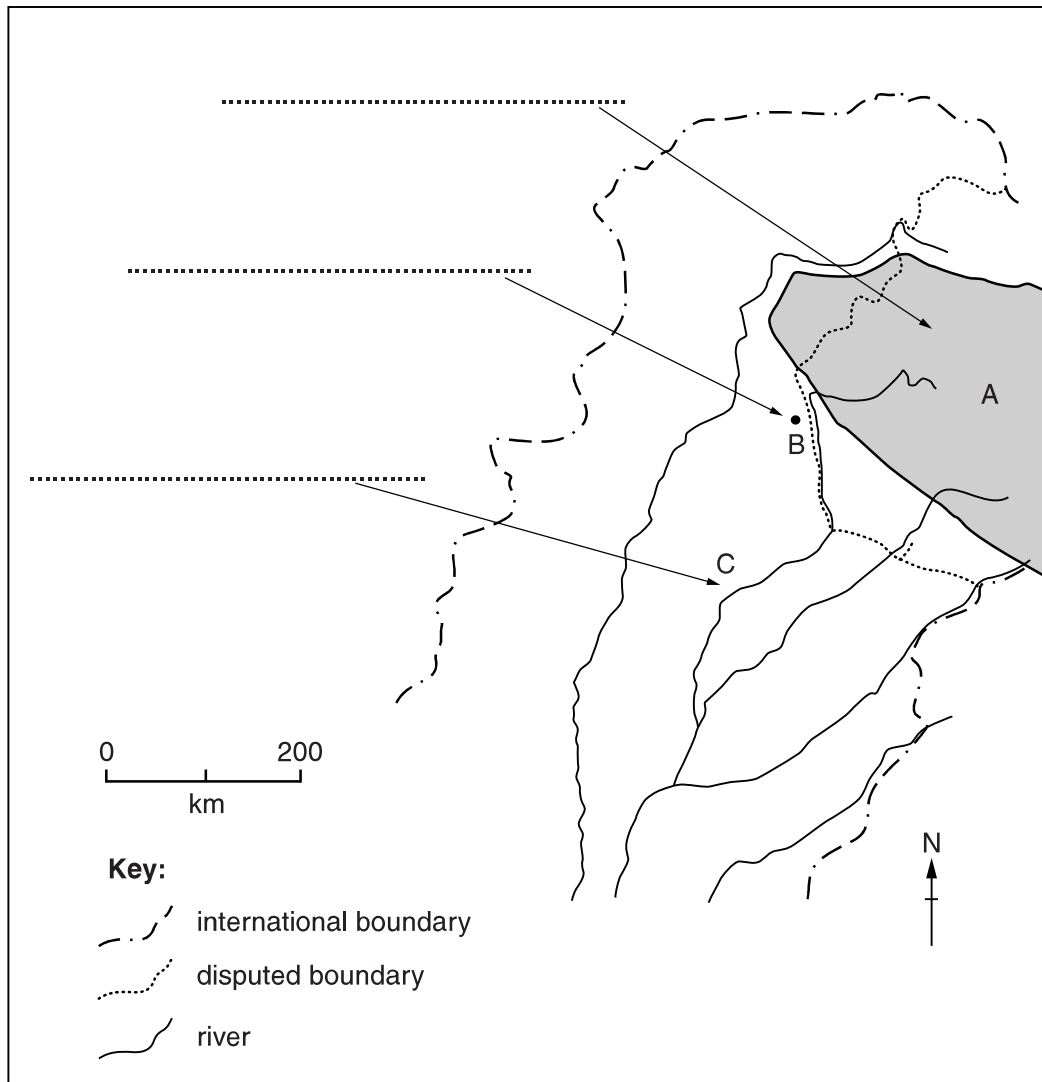



Fig. 1

(i) On the map name the following:

- Mountain range A
- City B
- River C

[3]



Q5/(a)(i)/P2/M/J/16

2 (a) Study Fig. 9 which is a map of southern Pakistan.

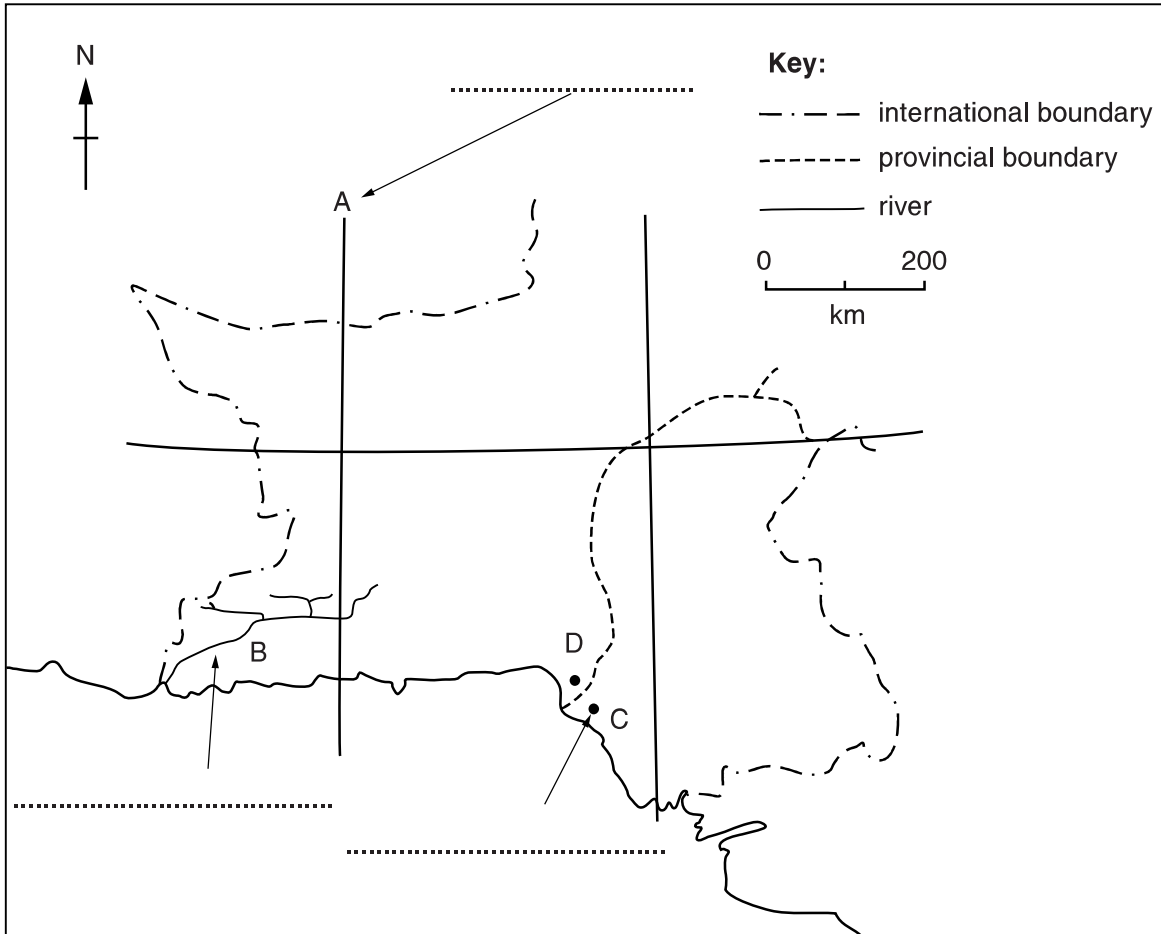



Fig. 9

(i) On the map name the following:

- Line of longitude A
- River B
- City C

[3]



Q4/(a)/P2/O/N/17

3 (a) Study Fig. 5, which is a map of southern Pakistan.

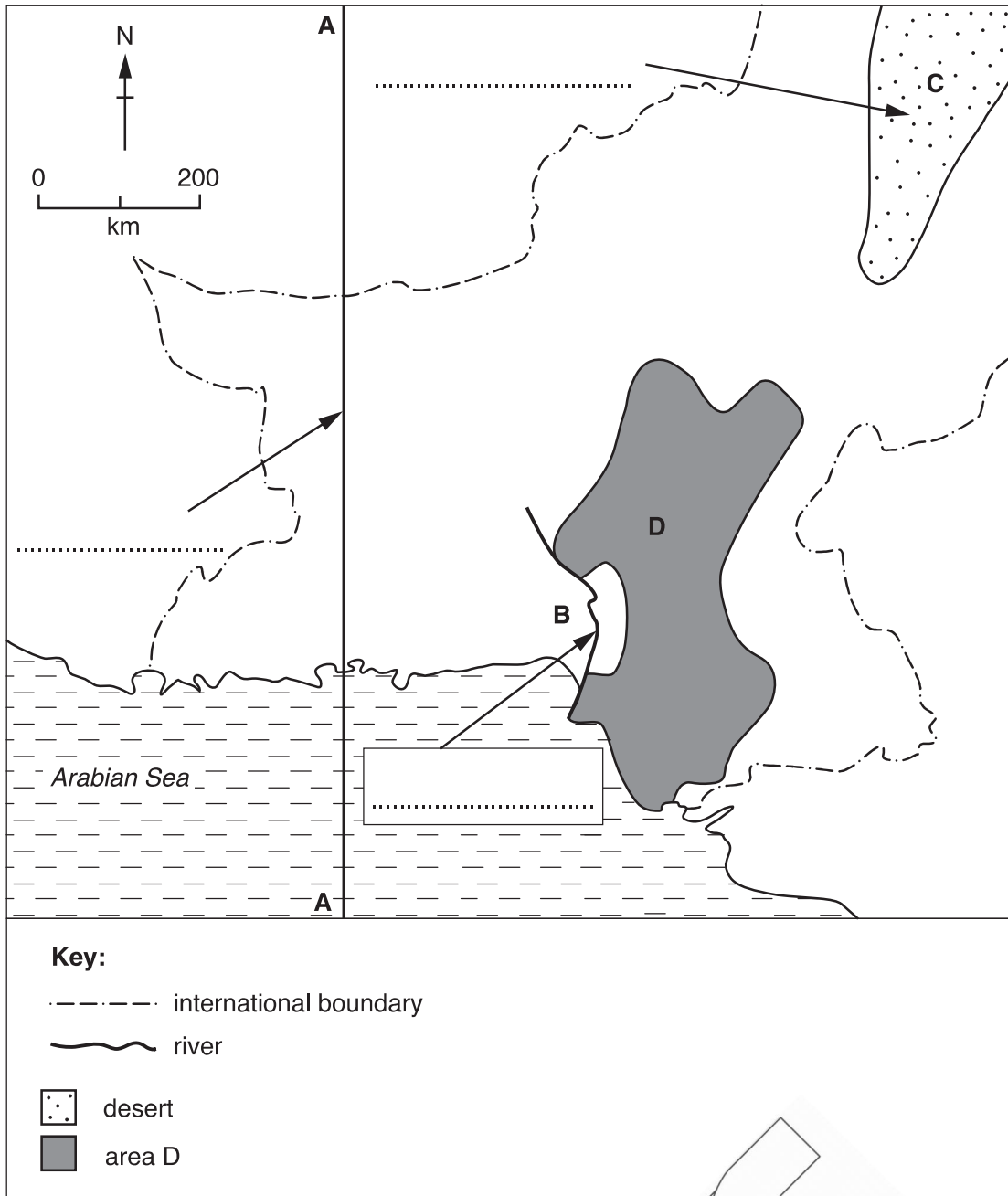


Fig. 5

- (i) On the map name the following: Line of longitude A–A; River B; Desert C. [3]
- (ii) Describe the natural topography (relief) of Area D on the map.

.....

.....

.....

.....

.....

.....[3]

Q1/02/M/J/18

4 (a) Study Fig. 1.1, a map of Pakistan.

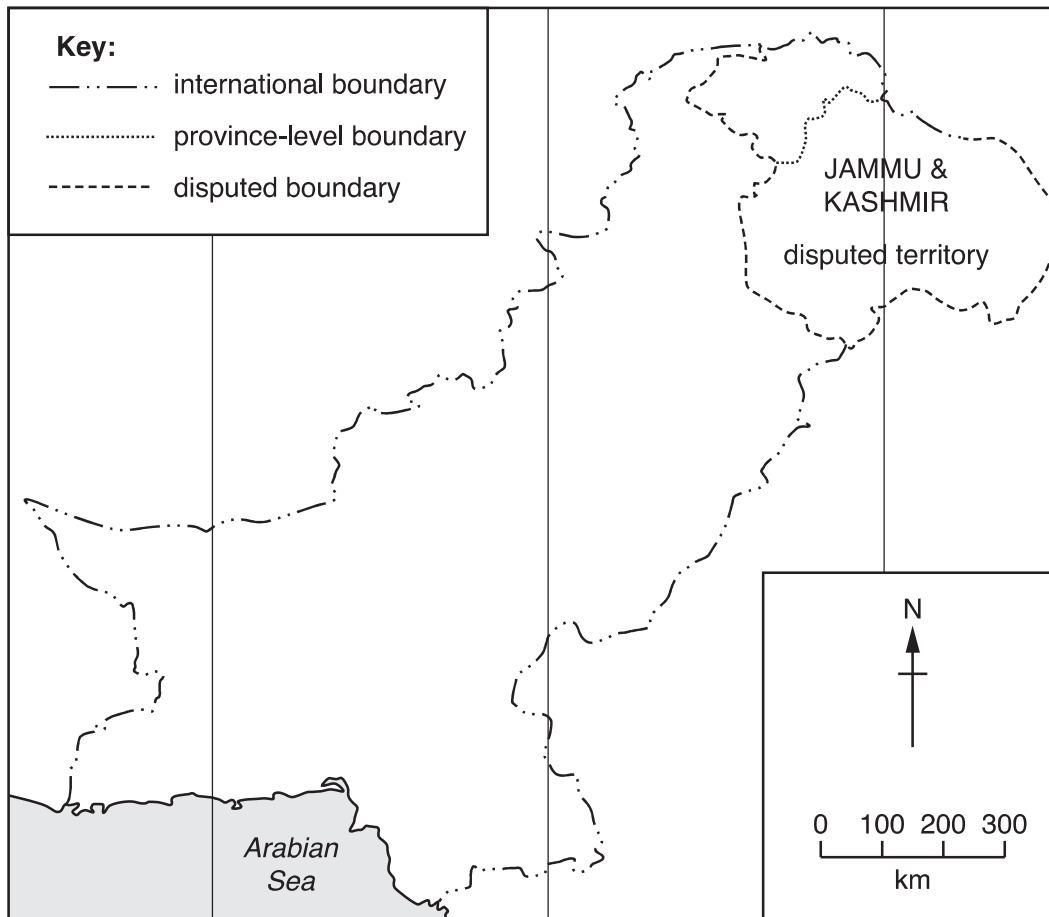


Fig. 1.1

- (i) On Fig. 1.1, **label** the following: Afghanistan; India; Line of longitude 70°E
You should write the name in the correct location on the map. [3]
- (ii) On Fig. 1.1, **draw** and **label** the Tropic of Cancer. [2]
- (iii) Describe Pakistan's location in relation to other countries in South and Central Asia.
.....
.....
.....
.....
.....
.....
..... [3]

(b) (i) Study Fig. 1.2 (Insert). Describe the main features of the desert area shown in the photograph.

.....
.....
.....
.....
.....
.....[3]

(ii) Explain the challenges of living in a desert area, such as that shown in Fig. 1.2. You should develop your answer.

.....
.....
.....
.....
.....
.....
.....
.....[4]




Fig. 1.2 for Question 1



MS
BOOKS

Q1/(a)(i)/P2/M/J/16

1 (a) Study Fig. 1 which is a map of northern Pakistan.**(i) On the map name the following: Mountain range A; City B; River C [3]**

A: Himalaya(s)
 B: Murree
 C: Jhelum

Q5/(a)(i)/P2/M/J/16

2 (a) Study Fig. 9 which is a map of southern Pakistan.**(i) On the map name the following: Line of longitude A; River B; City C [3]**

A: – 64E
 B: – Dasht
 C: – Karachi

Q4/(a)/P2/O/N/17 Q 3

Question	Answer	Marks
4(a)(i)	A 64°E B Hab C Thal 3 @ 1 mark	3
4(a)(ii)	∞ Flat or gentle sloping land; ∞ Lower Indus Plain / low altitude; ∞ Flood plain / active floodplain (bet) / old floodplain; ∞ Delta; ∞ Limestone cliffs at Hyderabad (Ganjo Takkar Hills) / escarpment / cuesta; ∞ Doab / sand dunes (tibbas); ∞ Piedmont plains with alluvial fans. 3 @ 1 mark	3
4(a)(iii)	∞ Heavy (high) rainfall / monsoon rainfall; ∞ Monsoon winds (strong wind) / SW monsoon / weather pattern from India / Arabian Sea; ∞ Rapid snow melt (in Himalayas / Karokoram / Hindu Kush / Tibet); ∞ Melting of glaciers (in Himalayas / Karokoram / Hindu Kush / Tibet). 2 @ 1 mark	2

MS
BOOKS

Question	Answer	Marks
1(a)(i)	<p>The following labelled in the correct locations:</p> <ul style="list-style-type: none"> ∞ Afghanistan – to west of Pakistan; ∞ India – to east of Pakistan; ∞ Longitude 70 °E – middle line of the three on map. <p style="text-align: right;">3 @ 1 mark</p>	3
1(a)(ii)	<ul style="list-style-type: none"> ∞ Accurately drawn line for position of Tropic of Cancer; ∞ Accurate label. <p style="text-align: right;">2 @ 1 mark</p>	2
1(a)(iii)	<ul style="list-style-type: none"> ∞ Western part of South Asia; ∞ India to the East / South East / North East; ∞ China to the North / North East; ∞ Afghanistan to the North West / West; ∞ Iran to the West / South West; ∞ Between / shares border with / neighbouring country with China / India / Afghanistan / Iran; ∞ Compass direction to any of the following non-conjoining countries in South and Central Asia ONLY: Nepal / Tajikistan / Kyrgyzstan / Turkmenistan / Uzbekistan / Sri Lanka / Bangladesh / Maldives / Burma (Myanmar); ∞ Distance to any the following non-conjoining countries in South and Central Asia ONLY: Nepal / Tajikistan / Kyrgyzstan / Turkmenistan / Uzbekistan / Sri Lanka / Bangladesh / Maldives / Burma (Myanmar). <p style="text-align: right;">3 @ 1 mark</p>	3
1(b)(i)	<ul style="list-style-type: none"> ∞ Sand / sandy; ∞ Sand dunes / ridges / hills / hilly; ∞ Large area / expanse / plain / plains; ∞ Sparse / scant vegetation / not much greenery / few trees / lack of trees; ∞ Small bushes / thorny bushes / scrub / rakh / shrubs; ∞ Barren / bare / dry; ∞ Oasis. <p style="text-align: right;">3 @ 1 mark</p>	3
1(b)(ii)	<p>Challenges such as:</p> <ul style="list-style-type: none"> ∞ High temperatures / hot (during day) / cold at night / uncomfortable living conditions; ∞ Lack of / little / unreliable rainfall; ∞ Difficult to grow crops / carry out agriculture; ∞ Difficult to rear animals; ∞ Lack of water / travel long distance to find water / low water table; ∞ Dust / sandstorms; ∞ Infertile soils / lack of nutrients / lack of humus produced; ∞ Reliable food supply; ∞ Isolated / far from urban areas / remote; ∞ Inaccessible / poor / lack of roads; ∞ Wild / poisonous animals. <p>Etc.</p> <p>Note: One mark for identification of appropriate idea and a further mark for development (in parentheses).</p> <p>Note: Max. 2 marks if no development.</p> <p style="text-align: right;">2 @ 2 marks</p>	4